




MATHS FINAL TEST PAPER

CLASS – I

Write 51 to 100

Give three different combinations of Rupees:

Write the numbers in words:

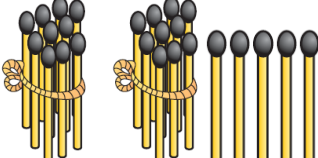
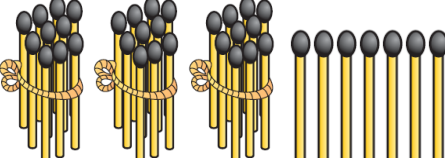
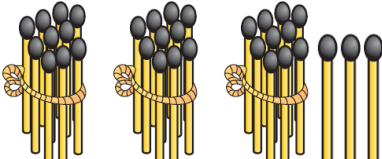
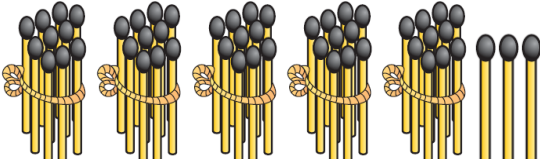
12		18	
24		30	
40		19	
15		16	
11		13	

Write tens and ones

















Tens <div style="display: flex; justify-content: space-around; align-items: center;"> <div style="text-align: right;">Ones</div> <div style="border: 1px solid black; width: 30px; height: 30px;"></div> </div>	Tens <div style="display: flex; justify-content: space-around; align-items: center;"> <div style="text-align: right;">Ones</div> <div style="border: 1px solid black; width: 30px; height: 30px;"></div> </div>	Tens <div style="display: flex; justify-content: space-around; align-items: center;"> <div style="text-align: right;">Ones</div> <div style="border: 1px solid black; width: 30px; height: 30px;"></div> </div>	Tens <div style="display: flex; justify-content: space-around; align-items: center;"> <div style="text-align: right;">Ones</div> <div style="border: 1px solid black; width: 30px; height: 30px;"></div> </div>
75	37	87	18

--	--	--	--

Write the numbers:

 _____	 _____
 _____	 _____

Complete the pattern:

          _____
      _____
A C D D A C _____

Cost of 1 banana is ` 5

Cost of 3 bananas is _____

Cost of 1 pencil is ` 3

Cost of 8 pencils is _____

Cost of 1 Eraser is ` 9

Cost of 7 Erasers is _____

Cost of 1 book is ` 10

Cost of 6 books is _____

Cost of 1 Sharpener is ` 8

Cost of 9 Sharpeners is _____

Cost of 1 pen is ` 7

Cost of 5 pens is _____

Write the next three numbers:

17 _____ 19 _____ 33 _____ 82 _____ 69 _____
 12 _____ 43 _____ 49 _____ 99 _____ 17 _____

What comes before:

____ 20 ____ 21 ____ 11 ____ 10 ____ 19
 ____ 30 ____ 40 ____ 24 ____ 8 ____ 60

Add the following numbers:

5 + 7 + 2 = _____ 5 + 3 + 7 = _____
 6 + 8 + 2 = _____ 6 + 4 + 7 = _____

$$7 + 9 + 4 = \underline{\quad} \quad 7 + 5 + 7 = \underline{\quad}$$

Write the number in the blank.

$$\underline{\quad} 9 \quad 39 \underline{\quad} \quad 11 \underline{\quad} 13 \quad \underline{\quad} 22 \quad 29 \underline{\quad} \quad 18 \underline{\quad} 20$$

$$\underline{\quad} 14 \quad 28 \underline{\quad} \quad 12 \underline{\quad} 14 \quad \underline{\quad} 44 \quad 25 \underline{\quad} \quad 23 \underline{\quad} 25$$

Add the numbers:

6 marks

$$\begin{array}{r} 29 \\ + 54 \\ \hline \end{array} \quad \begin{array}{r} 88 \\ + 66 \\ \hline \end{array} \quad \begin{array}{r} 97 \\ + 78 \\ \hline \end{array} \quad \begin{array}{r} 89 \\ + 53 \\ \hline \end{array} \quad \begin{array}{r} 78 \\ + 68 \\ \hline \end{array} \quad \begin{array}{r} 67 \\ + 56 \\ \hline \end{array}$$

14 parrots are sitting on a tree. 6 of them flew away. How many parrots are left on the tree?

Ans:

Reena has 14 apples. She gave 6 to her friend. How many apples are left with her?

Ans:

In a garden, there are 7 mango trees and 8 orange trees. How many trees are there in together?

Ans:

Rahim had 12 flowers. He put 3 flowers in vase. How many flowers are left with him.

Ans:

Aditya has 8 pencils. His mother gave him 7 more pencils. How many pencils he has in all?

Ans:

Noorie has 9 red pencils, 7 blue pencils. How many pencils she has in all?

Ans:

