





# MATHS TEST PAPER

## CLASS – I

Write 1 to 100

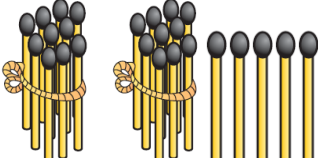
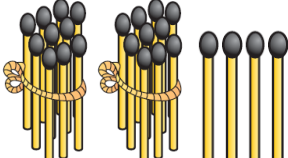
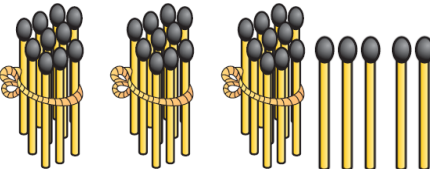
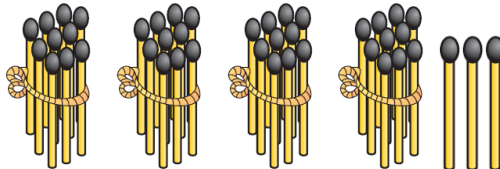
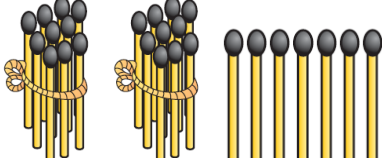

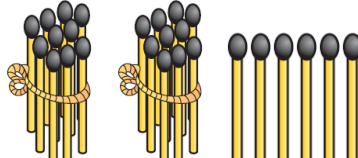
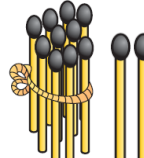

Give three different combinations of Rupees:

 <b>6 Rupees</b>			
 <b>4 Rupees</b>			
 <b>3 Rupees</b>			
 <b>5 Rupees</b>			

**Write the numbers in words:**

<b>1.</b>		<b>2.</b>	
<b>3.</b>		<b>4.</b>	
<b>5.</b>		<b>6.</b>	
<b>7.</b>		<b>8.</b>	
<b>9.</b>		<b>10.</b>	
<b>11.</b>		<b>12.</b>	
<b>13.</b>		<b>14.</b>	
<b>15.</b>		<b>16.</b>	
<b>17.</b>		<b>18.</b>	
<b>19.</b>		<b>20.</b>	
<b>21.</b>		<b>22.</b>	
<b>23.</b>		<b>24.</b>	
<b>25.</b>		<b>26.</b>	
<b>27.</b>		<b>28.</b>	
<b>29.</b>		<b>30.</b>	
<b>31.</b>		<b>32.</b>	
<b>33.</b>		<b>34.</b>	
<b>35.</b>		<b>36.</b>	
<b>37.</b>		<b>38.</b>	
<b>39.</b>		<b>40.</b>	
<b>41.</b>		<b>42.</b>	
<b>43.</b>		<b>44.</b>	
<b>45.</b>		<b>46.</b>	
<b>47.</b>		<b>48.</b>	
<b>49.</b>		<b>50.</b>	
<b>51.</b>		<b>52.</b>	
<b>53.</b>		<b>54.</b>	
<b>55.</b>		<b>56.</b>	
<b>57.</b>		<b>58.</b>	
<b>59.</b>		<b>60.</b>	
<b>61.</b>		<b>62.</b>	
<b>63.</b>		<b>64.</b>	
<b>65.</b>		<b>66.</b>	
<b>67.</b>		<b>68.</b>	




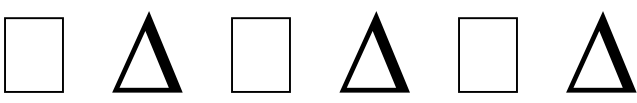
Write the numbers:

	_____
	_____
	_____
	_____
	_____
	_____
	_____
	_____

Write tens and ones

<p>Tens <input type="text"/></p> <p>Ones <input type="text"/></p> <p>43</p>	<p>Tens <input type="text"/></p> <p>Ones <input type="text"/></p> <p>34</p>	<p>Tens <input type="text"/></p> <p>Ones <input type="text"/></p> <p>68</p>	<p>Tens <input type="text"/></p> <p>Ones <input type="text"/></p> <p>78</p>
<p>Tens <input type="text"/></p> <p>Ones <input type="text"/></p> <p>65</p>	<p>Tens <input type="text"/></p> <p>Ones <input type="text"/></p> <p>29</p>	<p>Tens <input type="text"/></p> <p>Ones <input type="text"/></p> <p>97</p>	<p>Tens <input type="text"/></p> <p>Ones <input type="text"/></p> <p>56</p>

Complete the pattern:

	_____
	_____
	_____
	_____

# A C D D A C \_

Write the multiplication table of 2, 3, 4.

10 marks

2	x	1	=	

3	x	1	=	

4	x	1	=	

Write the multiplication table of 5, 6, 7

10 marks

5	x	1	=	

6	x	1	=	

7	x	1	=	

Cost of 1 banana is ` 5  
Cost of 3 bananas is \_\_\_\_\_

Cost of 1 pencil is ` 3  
Cost of 8 pencils is \_\_\_\_\_

Cost of 1 Eraser is ` 9  
Cost of 7 Erasers is \_\_\_\_\_

Cost of 1 book is ` 10  
Cost of 6 books is \_\_\_\_\_

Cost of 1 Sharpener is ` 8  
Cost of 9 Sharpeners is \_\_\_\_\_

Cost of 1 pen is ` 7  
Cost of 5 pens is \_\_\_\_\_