





MATHS TEST PAPER

CLASS – I

Write 1 to 100









Give three different combinations of Rupees:

 <p>6 Rupees</p>			
 <p>4 Rupees</p>			
 <p>3 Rupees</p>			
 <p>5 Rupees</p>			

Write the numbers in words:

1.		2.	
3.		4.	
5.		6.	
7.		8.	
9.		10.	
11.		12.	
13.		14.	
15.		16.	
17.		18.	
19.		20.	
21.		22.	
23.		24.	
25.		26.	
27.		28.	
29.		30.	
31.		32.	
33.		34.	
35.		36.	
37.		38.	
39.		40.	
41.		42.	
43.		44.	
45.		46.	
47.		48.	
49.		50.	
51.		52.	
53.		54.	
55.		56.	
57.		58.	
59.		60.	
61.		62.	
63.		64.	
65.		66.	
67.		68.	

Give three different combinations of Rupees using 1, 2 and 5 Rupee coins:

 <p>7 Rupees</p>			
 <p>8 Rupees</p>			
 <p>9 Rupees</p>			
 <p>10 Rupees</p>			
 <p>11 Rupees</p>			
 <p>12 Rupees</p>			
 <p>13 Rupees</p>			
 <p>14 Rupees</p>			

Write the multiplication table of 2, 3, 4.

10 marks

2	x	1	=	

3	x	1	=	

4	x	1	=	

Write the multiplication table of 5, 6, 7

10 marks

5	x	1	=	

6	x	1	=	

7	x	1	=	

Cost of 1 banana is ` 5
Cost of 3 bananas is _____

Cost of 1 pencil is ` 3
Cost of 8 pencils is _____

Cost of 1 Eraser is ` 9
Cost of 7 Erasers is _____

Cost of 1 book is ` 10
Cost of 6 books is _____

Cost of 1 Sharpener is ` 8
Cost of 9 Sharpeners is _____

Cost of 1 pen is ` 7
Cost of 5 pens is _____